

WRITE THE NUMBERS!

1 2 3 4 5
6 7 8 9 10
11 12 13 14 15
16 17 18 19 20
21 22 23 24 25

GRADE **1**

- Teacher Guidelines ▶ pages 1 – 2
- Instructional Pages ▶ pages 3 – 4
- Activity Page ▶ pages 5 – 6
- Practice Page ▶ pages 7 – 8
- Homework Page ▶ page 9
- Answer Key ▶ page 10

Classroom Procedure:

1. Introduce the lesson by giving students a 120 chart and having them fill in as many numbers as they can.
2. Distribute Write the Numbers content pages. Ask students what number comes after 88? What number comes before 35?
3. Distribute the Activity Page. Students should cut out and reassemble the 120 charts. If students have a math notebook, they should glue it in their notebook.
4. Distribute the Practice Page.
5. Distribute the Homework Page.
6. In closing, ask students what numbers could come after 120. Then, ask them to think of the largest number they know and share it with the person next to them. Finally, have them write the number in word form when they share with a partner.

Lesson Title: **Write the Numbers!**

Subject: **Math**

Approximate Grade Level: **1**

Objectives: The student will be able to read and write numbers up to 120. Students will write numeric forms and number words. Students will be able to identify both forms.

State Educational Standards*
LB.MATH.CONTENT.1.NBT.A.1

Class Sessions (45 minutes):
1 Class Session

Teaching Materials/Worksheets:
Content Pages (1), Activity Page (2), Practice Pages (2), Homework Pages (2)

Student Supplies:
Scissors, glue, extra paper

Prepare Ahead of Time:
Copies of worksheets

Options for Lesson: Create a PowerPoint or Google Slide show with the numbers 1 – 120. Show the slideshow and have the students write the word form of the number as it appears on the slides. The second version is to mix the word and numeric formats on the slides. Finally, have students identify and write the opposite of the form. For example, if the slide is 55, students write fifty-five. If the slide reads ninety-three, students write 93.

*Lessons are aligned to meet the education objectives and goals of most states. For more information on your state objectives, contact your local Board of Education or Department of Education in your state.

Write the Numbers: Numeric Form

Every day people use numbers. So let's learn our numbers from 1 to 120! Here is a chart showing the numbers:

1	2	3	4	5	6	7	8	9	10
11	12	13	14	15	16	17	18	19	20
21	22	23	24	25	26	27	28	29	30
31	32	33	34	35	36	37	38	39	40
41	42	43	44	45	46	47	48	49	50
51	52	53	54	55	56	57	58	59	60
61	62	63	64	65	66	67	68	69	70
71	72	73	74	75	76	77	78	79	80
81	82	83	84	85	86	87	88	89	90
91	92	93	94	95	96	97	98	99	100
101	102	103	104	105	106	107	108	109	110
111	112	113	114	115	116	117	118	119	120

Write the Numbers: Word Form

Each number form also has a word form! Here is a chart with the number and word form. You can write numbers in word form. For example, the number **10** in word form is **ten**. Likewise, you can write numbers in word form in number form. For example, the word form **One Hundred one** in number form is **101**.

Let's practice writing numbers and word form!

One 1	Thirteen 13	Twenty five 25	Thirty seven 37	Forty nine 49	Sixty one 61	Seventy three 73	Eighty five 85	Ninety seven 97	One Hundred nine 109
Two 2	Fourteen 14	Twenty six 26	Thirty eight 38	Fifty 50	Sixty Two 62	Seventy four 74	Eighty six 86	Ninety eight 98	One Hundred ten 110
Three 3	Fifteen 15	Twenty seven 27	Thirty nine 39	Fifty one 51	Sixty three 63	Seventy five 75	Eighty seven 87	Ninety nine 99	One Hundred eleven 111
Four 4	Sixteen 16	Twenty eight 28	Forty 40	Fifty two 52	Sixty Four 64	Seventy six 76	Eighty eight 88	One Hundred 100	One Hundred twelve 112
Five 5	Seventeen 17	Twenty nine 29	Forty one 41	Fifty Three 53	Sixty five 65	Seventy seven 77	Eighty nine 89	One Hundred one 101	One Hundred thirteen 113
Six 6	Eighteen 18	Thirty 30	Forty two 42	Fifty four 54	Sixty Six 66	Seventy eight 78	Ninety 90	One Hundred two 102	One Hundred fourteen 114
Seven 7	Nineteen 19	Thirty one 31	Forty three 43	Fifty five 55	Sixty seven 67	Seventy nine 79	Ninety one 91	One Hundred three 103	One Hundred fifteen 115
Eight 8	Twenty 20	Thirty two 32	Forty four 44	Fifty six 56	Sixty eight 68	Eighty 80	Ninety two 92	One Hundred four 104	One Hundred sixteen 116
Nine 9	Twenty one 21	Thirty three 33	Forty five 45	Fifty seven 57	Sixty nine 69	Eighty one 81	Ninety three 93	One Hundred five 105	One Hundred seventeen 117
Ten 10	Twenty two 22	Thirty four 34	Forty six 46	Fifty eight 58	Seventy 70	Eighty-two 82	Ninety-four 94	One Hundred six 106	One Hundred eighteen 118
Eleven 11	Twenty three 23	Thirty five 35	Fortyseven 47	Fifty nine 59	Seventy one 71	Eighty three 83	Ninety five 95	One Hundred seven 107	One Hundred nineteen 119
Twelve 12	Twenty four 24	Thirty six 36	Forty eight 48	Sixty 60	Seventy two 72	Eighty four 84	Ninety-six 96	One Hundred eight 108	One Hundred twenty 120

Write 25 in word form.

Write thirty in number form.

Write 109 in word form

Write One Hundred nineteen in number form

Write the day of your birthday in number form.

Write the day of your birthday in word form.



Now you know the number and word form for numbers!



Activity

Name _____ Date _____

Instructions: Oh no - the 120 chart broke apart! Put the pieces back together again.

101	102	103	104	105	106	107	108	109	110
111	112	113	114	115	116	117	118	119	120

31	32	33	34	35	36	37	38	39	40
----	----	----	----	----	----	----	----	----	----

1	2	3	4	5	6	7	8	9	10
11	12	13	14	15	16	17	18	19	20

61	62	63	64	65	66	67	68	69	70
71	72	73	74	75	76	77	78	79	80

21	22	23	24	25	26	27	28	29	30
----	----	----	----	----	----	----	----	----	----

81	82	83	84	85	86	87	88	89	90
----	----	----	----	----	----	----	----	----	----

91	92	93	94	95	96	97	98	99	100
----	----	----	----	----	----	----	----	----	-----

41	42	43	44	45	46	47	48	49	50
51	52	53	54	55	56	57	58	59	60



Instructions: Oh no - the 120 chart broke apart! Put the pieces back together again in the correct order.

1	2	3	4	5	6	7	8	9	10
11	12	13	14	15	16	17	18	19	20
21	22	23	24	25	26	27	28	29	30
31	32	33	34	35	36	37	38	39	40
41	42	43	44	45	46	47	48	49	50
51	52	53	54	55	56	57	58	59	60
61	62	63	64	65	66	67	68	69	70
71	72	73	74	75	76	77	78	79	80
81	82	83	84	85	86	87	88	89	90
91	92	93	94	95	96	97	98	99	100
101	102	103	104	105	106	107	108	109	110
111	112	113	114	115	116	117	118	119	120

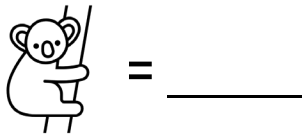
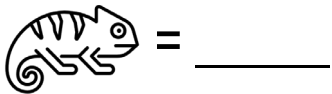
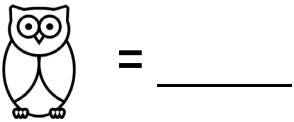
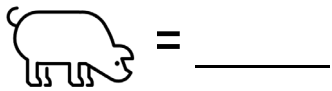
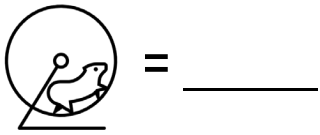







Practice

Name _____ Date _____



Instructions: What number is covered by the animal?



1	2	3	4			7	8	9	
11				15	16	17	18	19	20
21	22	23		25	26		28		
31		33	34		36	37	38		40
41	42			45	46	47		49	50
51	52		54	55			58	59	60

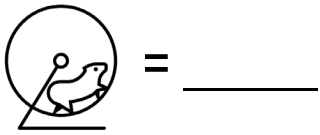
Fill in the missing numbers.

81	82		84	85	86	87	88	89	90
91	92	93	94	95	96		98	99	
	102	103	104		106	107	108	109	110
111	112	113	114	115	116	117			120

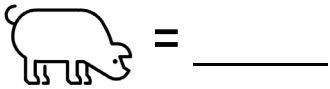
Write the missing numbers in word form. _____



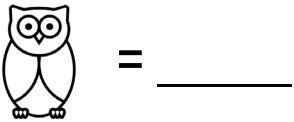
Instructions: What number is covered by the animal?



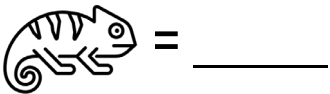
= _____



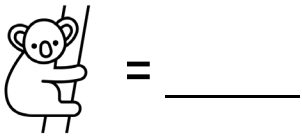
= _____








= _____



= _____



= _____

1	2	3	4			7	8	9	
11				15	16	17	18	19	20
21	22	23		25	26		28		
31		33	34		36	37	38		40
41	42			45	46	47		49	50
51	52		54	55			58	59	60

Fill in the missing numbers.

81	82	83	84	85	86	87	88	89	90
91	92	93	94	95	96	97	98	99	100
101	102	103	104	105	106	107	108	109	110
111	112	113	114	115	116	117	118	119	120

Write the missing numbers in word form. Eighty three, ninety seven, one hundred, one hundred one, one hundred eighteen, and one hundred nineteen.



Homework

Name _____ Date _____



Instructions: Find the missing number!

Draw a dot to show where fifty two is on the number line.



Draw a dot to show where sixteen is on the number line.



Draw a dot to show where one hundred three is on the number line.



Draw a dot to show thirty three is on the number line.



Draw a dot to show where eighty is on the number line.





Instructions: Find the missing number!

Draw a dot to show where fifty two is on the number line. **Teachers may want the students to write the numbers in the squares for additional practice.**



Draw a dot to show where sixteen is on the number line.



Draw a dot to show where one hundred three is on the number line.



Draw a dot to show thirty three is on the number line.



Draw a dot to show where eighty is on the number line.

